



# 2 Tracer, reporter des longueurs


Nom : \_\_\_\_\_ Date : \_\_\_\_\_


R


## 1 Trace les segments suivants.

AB = 9 cm 




CD = 12 cm 




EF = 8 cm 

GH = 13 cm 




IJ = 11 cm 




## 2 À l'aide de ta règle, mesure et reporte ces différents segments.

A  B C  D E  F

G  H I  J K  L

## 3 À l'aide de ton compas, reporte ces différents segments.

A  B C  D E  F

G  H I  J K  L

## 4 Trace un rectangle qui a 6 cm de longueur et 40 mm de largeur.

